

Aşağıda verilen saatlerin okunuşlarını yazınız.






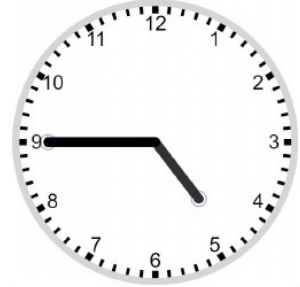




























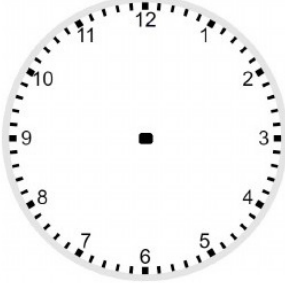
2. SINIF

ZAMANI ÖLÇME-1

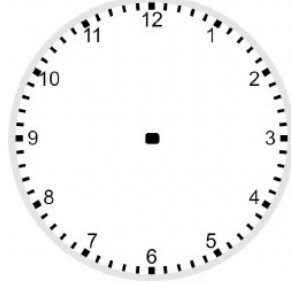


MATEMATİK

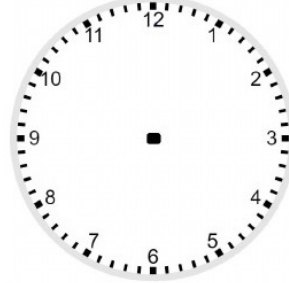
Aşağıda okunuşları verilen saatleri gösteriniz.



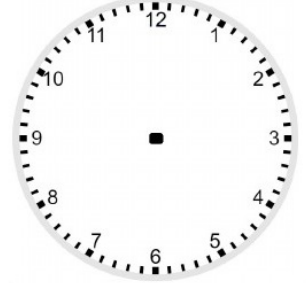
05:30



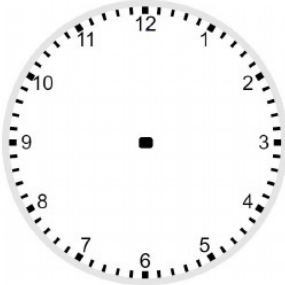
10:00



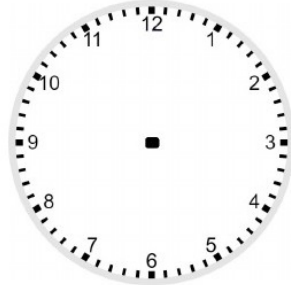
09:30



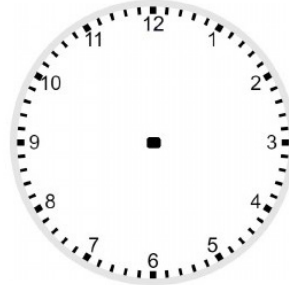
01:00



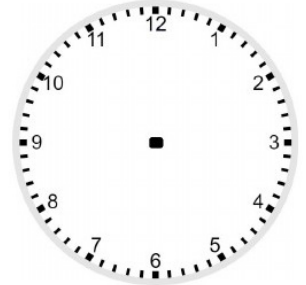
11:45



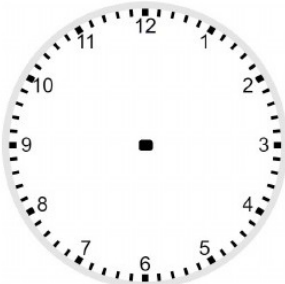
12:15



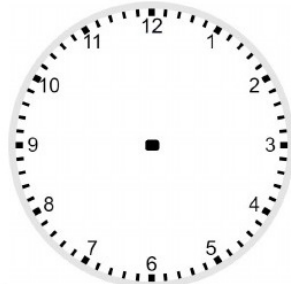
02:00



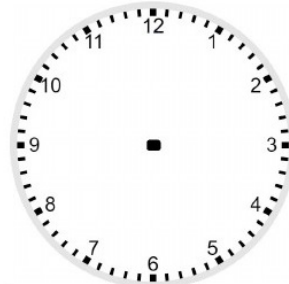
04:45



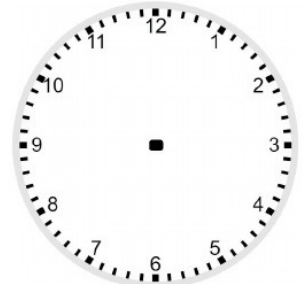
01:00



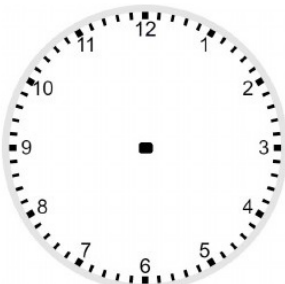
08:15



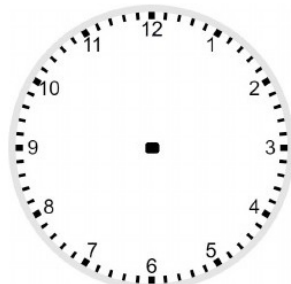
03:30



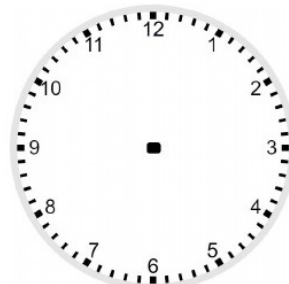
07:30



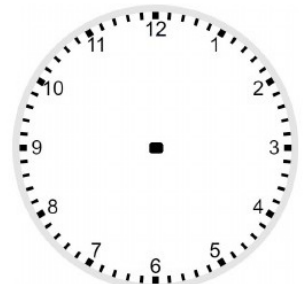
11:00



12:00



10:45



01:15

2. SINIF

ZAMANI ÖLÇME-2



MATEMATİK

Aşağıda verilen saatlerin öğleden önce ve sonra kaç gösterdiğini yazınız.

Öğleden önce	09:30			
Öğleden sonra	21:30			

Öğleden önce				
Öğleden sonra				

Aşağıda verilen öğleden sonra saatlerini gösteriniz.

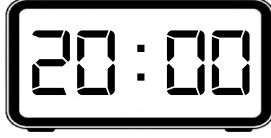
13:45	17:15	23:00	21:30	19:00

15:00	14:30	21:45	22:15	16:15

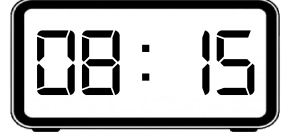


Aşağıda verilen saatlerin altına "sabah, öğle, akşam, gece" ifadelerinden uygun olanı yazınız.





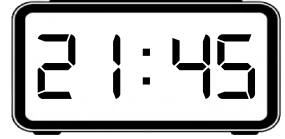






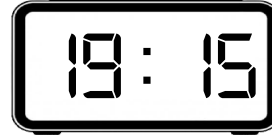


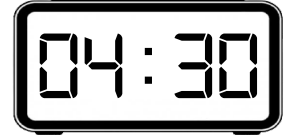












Aşağıda verilen saatlerin öncesi ve sonrasını yazınız.

15 dakika
önce

15 dakika
sonra







yarım saat
önce

yarım saat
sonra







45 dakika
önce

45 dakika
sonra







1 saat önce

1 saat sonra





