

SAAT KAÇ? - 3

Aşağıdaki saatlerin karşısına öğleden sonraki karşılıklarını yazalım.

02.00

=

04.15

=

09.15

=

08.45

=

07.30

=

03.30

=

06.45

=

11.45

=

01.30

=

05.15

=



Aşağıdaki saatlerin karşısına öğleden önceki karşılıklarını yazalım.

13.30

=

17.00

=

20.45

=

22.30

=

15.00

=

14.15

=

18.30

=

19.00

=

16.15





=

12.30

=



Verilen saatleri ve okunuşlarını öğleden önce olarak altlarına yazalım.







Öğleden önce :
Öğleden sonra :

Öğleden önce :
Öğleden sonra :

Öğleden önce :
Öğleden sonra :

Öğleden önce :
Öğleden sonra :

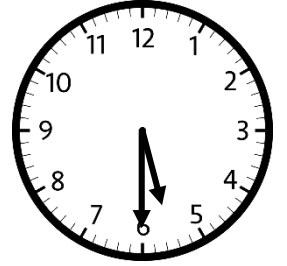

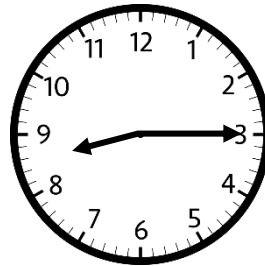



Öğleden önce :
Öğleden sonra :

Öğleden önce :
Öğleden sonra :

Öğleden önce :
Öğleden sonra :

Öğleden önce :
Öğleden sonra :

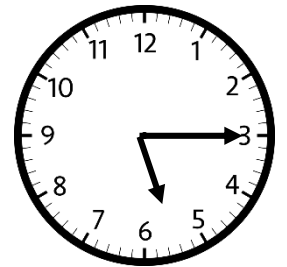


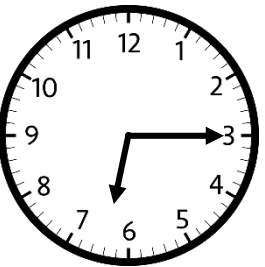


Öğleden önce :
Öğleden sonra :

Öğleden önce :
Öğleden sonra :

Öğleden önce :
Öğleden sonra :

Öğleden önce :
Öğleden sonra :







Öğleden önce :
Öğleden sonra :

Öğleden önce :
Öğleden sonra :

Öğleden önce :
Öğleden sonra :

Öğleden önce :
Öğleden sonra :



Öğleden önce :
Öğleden sonra :

Öğleden önce :
Öğleden sonra :

Öğleden önce :
Öğleden sonra :

Öğleden önce :
Öğleden sonra :