

Kesirleri oluřturalım

Kesirler nasıl oluřturulur?

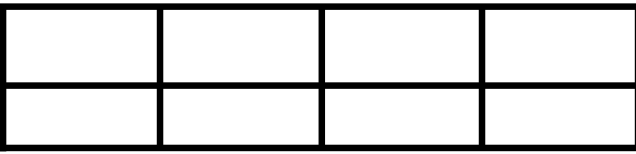
1. Önce eřit dilimlere ayrılabilcek bir Őekil oluřturalım.




2. Sonra bir kesir belirleyelim

$$\begin{array}{l} 3 \rightarrow \text{pay} \\ \hline 8 \rightarrow \text{payda} \end{array}$$

3. Payda kadar eřit dilimlere ayıralım.



4. Pay kadar boyayalım.



1. Önce eřit dilimlere ayrılabilcek bir Őekil oluřturalım.

2. Sonra bir kesir belirleyelim

3. Payda kadar eřit dilimlere ayıralım.

4. Pay kadar boyayalım.

Aşağıdaki kesirlerin okunuşunu yazınız.

$\frac{2}{4}$	dörtde iki
$\frac{4}{4}$	iki bölü dört

$\frac{8}{14}$	

$\frac{2}{6}$	

$\frac{5}{12}$	

$\frac{4}{8}$	

$\frac{7}{10}$	

$\frac{6}{6}$	

$\frac{3}{4}$	

$\frac{6}{12}$	

$\frac{3}{8}$	














$\frac{8}{14}$	

$\frac{2}{12}$	

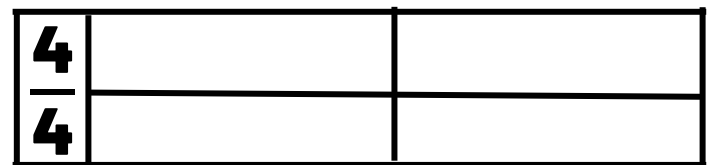
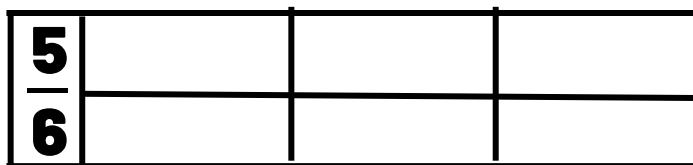
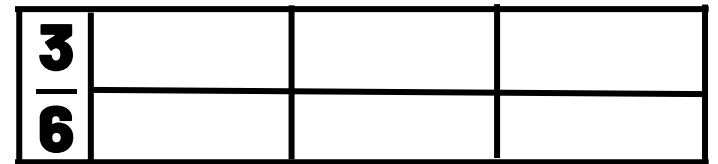
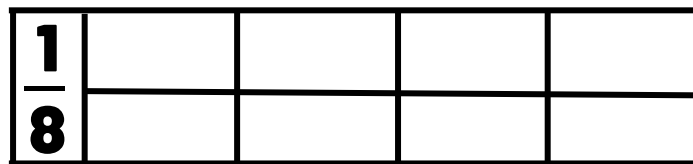
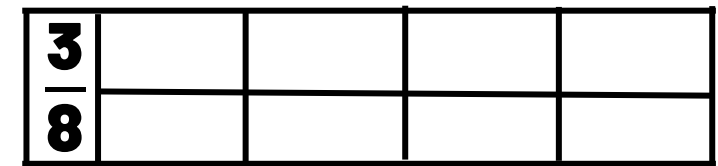
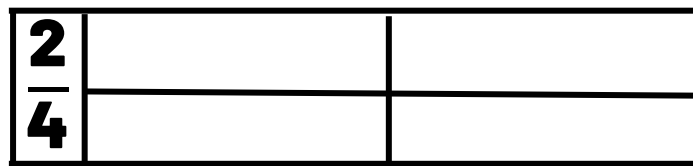
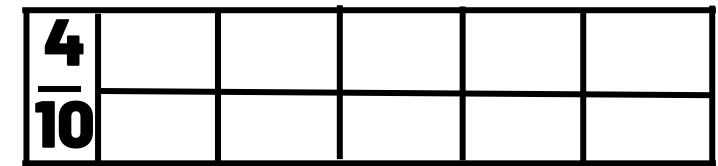
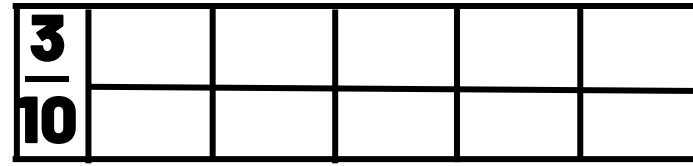
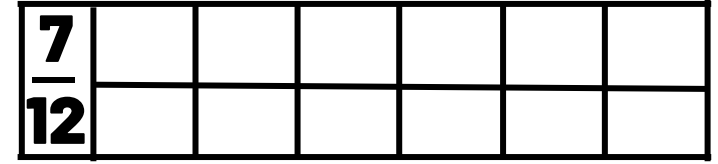
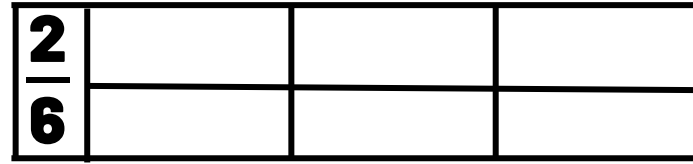
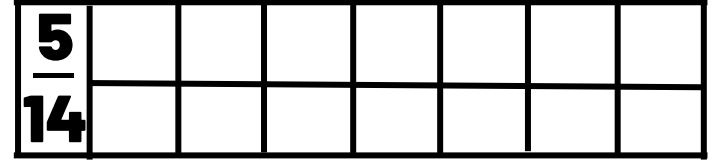

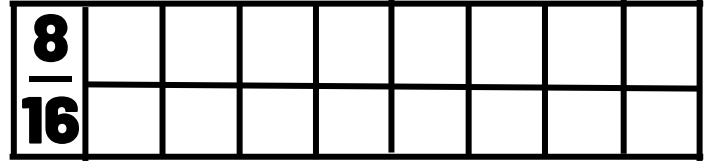
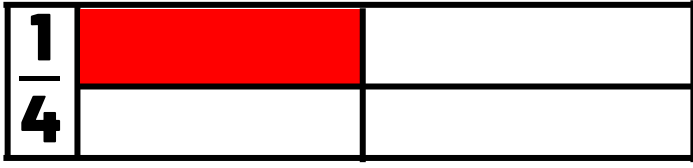
$\frac{5}{10}$	

$\frac{5}{6}$	

Aşağıdaki kesirleri oluşturunuz.



Aşağıdaki kesirleri boyayınız.



Aşağıdaki

