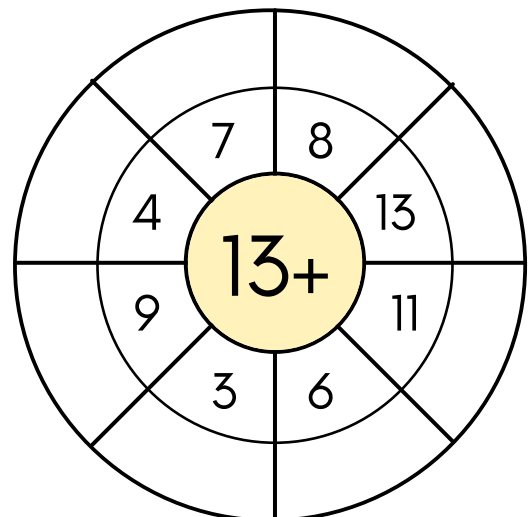
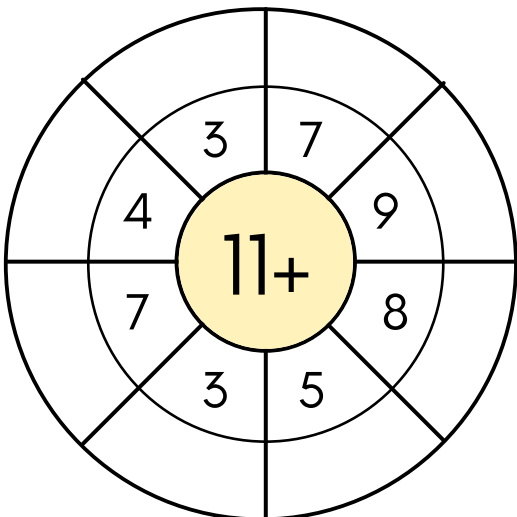
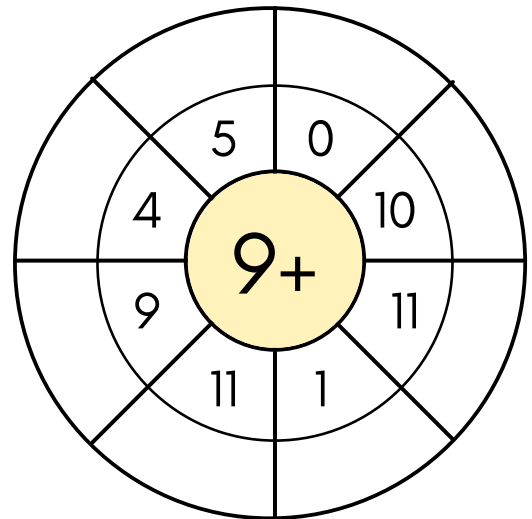
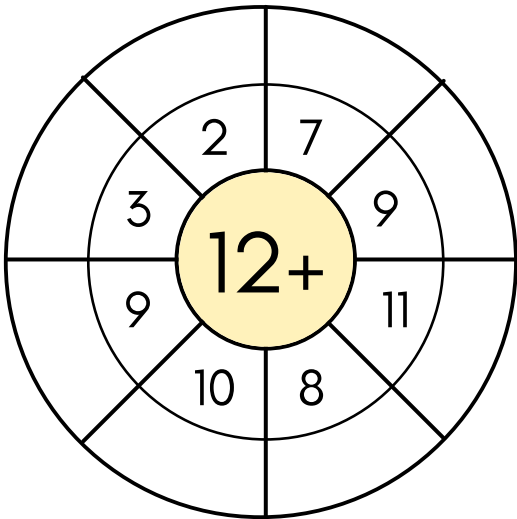
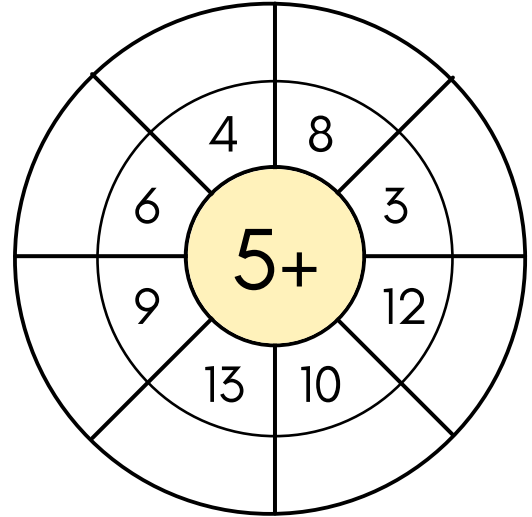
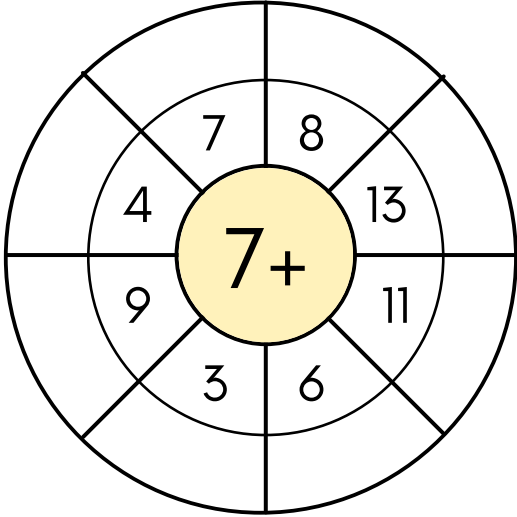



TOPLAMA ÇARKLARI



İSİM: _____

TOPLAYALIM



$$\begin{array}{r} 6 \\ +3 \\ \hline \end{array}$$

$$\begin{array}{r} 2 \\ +4 \\ \hline \end{array}$$

$$\begin{array}{r} 5 \\ +1 \\ \hline \end{array}$$

$$\begin{array}{r} 8 \\ +2 \\ \hline \end{array}$$

$$\begin{array}{r} 7 \\ +3 \\ \hline \end{array}$$

$$\begin{array}{r} 2 \\ +7 \\ \hline \end{array}$$

$$\begin{array}{r} 9 \\ +1 \\ \hline \end{array}$$

$$\begin{array}{r} 5 \\ +2 \\ \hline \end{array}$$

$$\begin{array}{r} 6 \\ +4 \\ \hline \end{array}$$

$$\begin{array}{r} 2 \\ +2 \\ \hline \end{array}$$

$$\begin{array}{r} 5 \\ +7 \\ \hline \end{array}$$

$$\begin{array}{r} 7 \\ +2 \\ \hline \end{array}$$

$$\begin{array}{r} 5 \\ +3 \\ \hline \end{array}$$

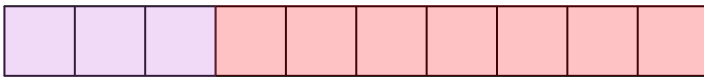

$$\begin{array}{r} 2 \\ +9 \\ \hline \end{array}$$

$$\begin{array}{r} 4 \\ +1 \\ \hline \end{array}$$


$$\begin{array}{r} 5 \\ +7 \\ \hline \end{array}$$

Name: _____

TOPLAMI 10 EDEN SAYILAR



$$\textcircled{3} + \textcircled{7} = 10$$




$$\textcircled{} + \textcircled{} = 10$$




$$\textcircled{} + \textcircled{} = 10$$




$$\textcircled{} + \textcircled{} = 10$$



$$\textcircled{} + \textcircled{} = 10$$



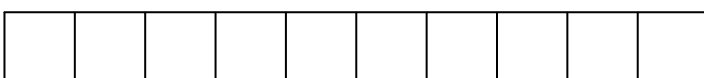
$$\textcircled{} + \textcircled{} = 10$$



$$\textcircled{} + \textcircled{} = 10$$



$$\textcircled{} + \textcircled{} = 10$$



$$\textcircled{} + \textcircled{} = 10$$

TOPLUYORUZ

+	2	5	4	1	6
3					
2					
4					
5					
1					

+	1	6	2	5	3
2					
4					
0					
5					
6					

+	4	7	5	2	3
5					
1					
3					
7					
8					

+	6	2	5	9	0
4					
1					
3					
2					
6					