



➤ Aşağıda verilen saatlerde akrep ve yelkovanları çizelim ve verilmeyen saati yazalım.




Öğleden önce: **07.50**
Öğleden sonra:




Öğleden önce:

Öğleden sonra: **13.50**




Öğleden önce: **03.35**
Öğleden sonra:




Öğleden önce:

Öğleden sonra: **21.25**




Öğleden önce: **05.45**
Öğleden sonra:

Öğleden sonra:




Öğleden önce: **01.05**
Öğleden sonra:

Öğleden sonra:




Öğleden önce: **02.05**
Öğleden sonra:

Öğleden sonra:




Öğleden önce:

Öğleden sonra: **23.55**




Öğleden önce:

Öğleden sonra: **20.20**




Öğleden önce: **11.45**
Öğleden sonra:




Öğleden önce:

Öğleden sonra: **22.35**




Öğleden önce: **12.15**
Öğleden sonra:




Öğleden önce:


Öğleden sonra: **21.20**




Öğleden önce: **07.55**
Öğleden sonra:



Öğleden önce: **04.25**
Öğleden sonra:




Öğleden önce: **07.30**
Öğleden sonra:



Öğleden önce:

Öğleden sonra: **14.40**



Öğleden önce:

Öğleden sonra: **18.10**