

## KAÇ TANE ?


Kartlardaki hayvanların kaç tane olduklarını sayıp ait olduğu rakamı boyayınız.




7 6 5



0 1 2



2 3 4




5 6 7




7 8 9




6 7 8



4 5 6



1 2 3



6 7 8