
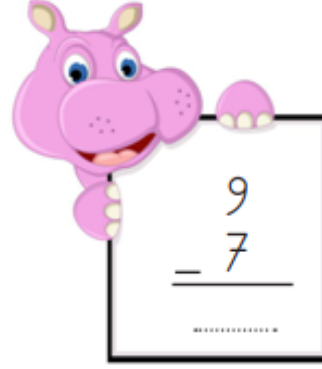



ÇIKARMA İŞLEMİ - 2

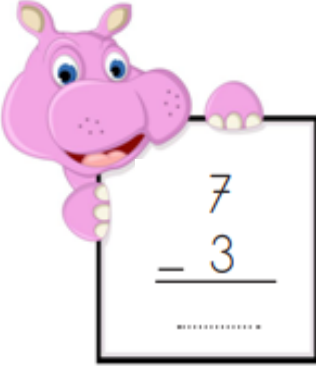
Aşağıdaki çıkarma işlemlerini yapınız.


$$\begin{array}{r} 7 \\ - 5 \\ \hline \end{array}$$


$$\begin{array}{r} 9 \\ - 5 \\ \hline \end{array}$$

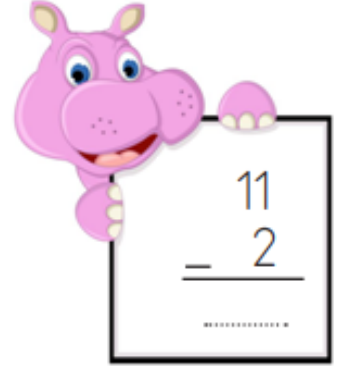

$$\begin{array}{r} 9 \\ - 7 \\ \hline \end{array}$$


$$\begin{array}{r} 7 \\ - 1 \\ \hline \end{array}$$

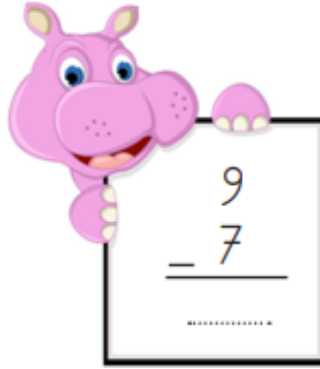

$$\begin{array}{r} 7 \\ - 3 \\ \hline \end{array}$$

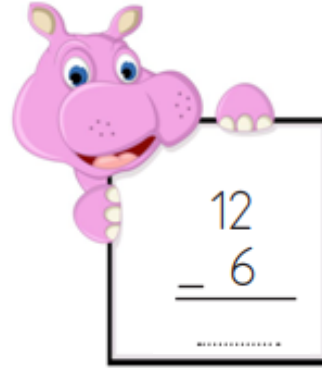

$$\begin{array}{r} 6 \\ - 3 \\ \hline \end{array}$$



$$\begin{array}{r} 2 \\ - 1 \\ \hline \end{array}$$



$$\begin{array}{r} 11 \\ - 2 \\ \hline \end{array}$$



$$\begin{array}{r} 3 \\ - 3 \\ \hline \end{array}$$

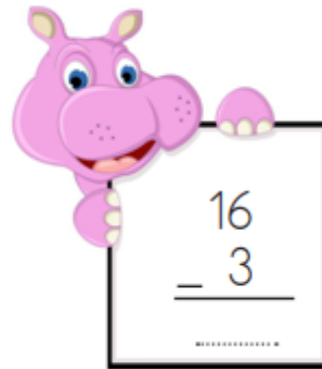

$$\begin{array}{r} 9 \\ - 7 \\ \hline \end{array}$$


$$\begin{array}{r} 12 \\ - 6 \\ \hline \end{array}$$


$$\begin{array}{r} 12 \\ - 8 \\ \hline \end{array}$$


$$\begin{array}{r} 11 \\ - 7 \\ \hline \end{array}$$


$$\begin{array}{r} 11 \\ - 4 \\ \hline \end{array}$$


$$\begin{array}{r} 16 \\ - 3 \\ \hline \end{array}$$


$$\begin{array}{r} 20 \\ - 8 \\ \hline \end{array}$$