





## YİRMIYE KADAR OLAN SAYILARLA ALT ALTA TOPLAMA YAPIYORUM


Aşağıdaki toplama işlemlerini yapınız.



$$\begin{array}{r} 15 \\ 2 \\ + \\ \hline \\ \dots \end{array}$$



$$\begin{array}{r} 14 \\ 3 \\ + \\ \hline \\ \dots \end{array}$$



$$\begin{array}{r} 12 \\ 4 \\ + \\ \hline \\ \dots \end{array}$$



$$\begin{array}{r} 11 \\ 6 \\ + \\ \hline \\ \dots \end{array}$$



$$\begin{array}{r} 12 \\ 2 \\ + \\ \hline \\ \dots \end{array}$$



$$\begin{array}{r} 18 \\ 1 \\ + \\ \hline \\ \dots \end{array}$$



$$\begin{array}{r} 16 \\ 3 \\ + \\ \hline \\ \dots \end{array}$$



$$\begin{array}{r} 13 \\ 5 \\ + \\ \hline \\ \dots \end{array}$$



$$\begin{array}{r} 14 \\ 5 \\ + \\ \hline \\ \dots \end{array}$$



$$\begin{array}{r} 13 \\ 2 \\ + \\ \hline \\ \dots \end{array}$$



$$\begin{array}{r} 12 \\ 6 \\ + \\ \hline \\ \dots \end{array}$$


$$\begin{array}{r} 11 \\ 6 \\ + \\ \hline \\ \dots \end{array}$$


$$\begin{array}{r} 17 \\ 2 \\ + \\ \hline \\ \dots \end{array}$$


$$\begin{array}{r} 15 \\ 4 \\ + \\ \hline \\ \dots \end{array}$$


$$\begin{array}{r} 13 \\ 4 \\ + \\ \hline \\ \dots \end{array}$$


$$\begin{array}{r} 11 \\ 7 \\ + \\ \hline \\ \dots \end{array}$$