


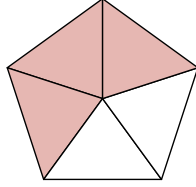
İsim: _____

KESİRLER

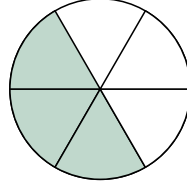
Boyalı alanları gösteren kesirleri yazalım.



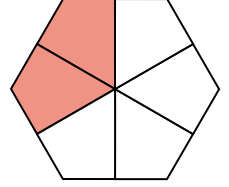
$$\frac{4}{5}$$



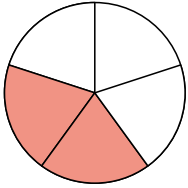
$$\frac{\quad}{\quad}$$



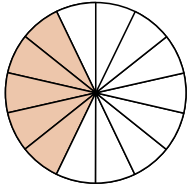
$$\frac{\quad}{\quad}$$



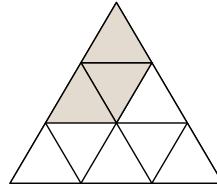
$$\frac{\quad}{\quad}$$



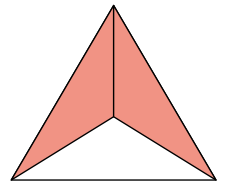
$$\frac{\quad}{\quad}$$



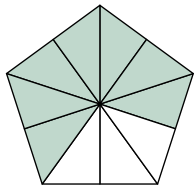
$$\frac{\quad}{\quad}$$



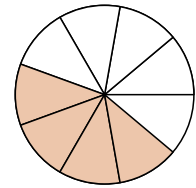
$$\frac{\quad}{\quad}$$



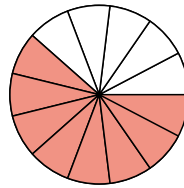
$$\frac{\quad}{\quad}$$



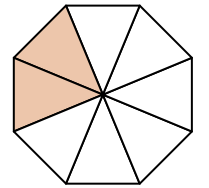
$$\frac{\quad}{\quad}$$



$$\frac{\quad}{\quad}$$



$$\frac{\quad}{\quad}$$




$$\frac{\quad}{\quad}$$

İsim: _____

Eşleştirelim

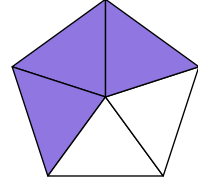
İkide bir

$$\frac{3}{5}$$



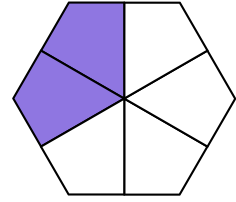
Beşte iki

$$\frac{2}{3}$$



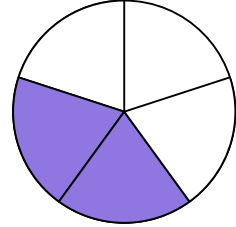
Beşte dört

$$\frac{1}{3}$$



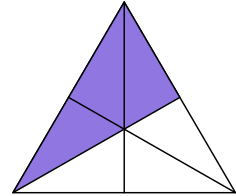
Üçte bir

$$\frac{4}{5}$$



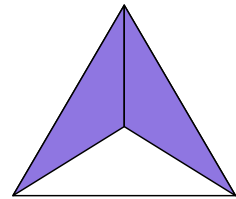
Üçte iki

$$\frac{2}{5}$$



Beşte üç

$$\frac{1}{2}$$



EŞLEŞTİRELİM



$$\frac{1}{8}$$

$$\frac{3}{8}$$

$$\frac{1}{4}$$

$$1$$

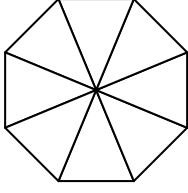
$$\frac{1}{2}$$

$$\frac{5}{8}$$

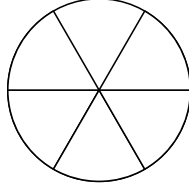
$$\frac{7}{8}$$

İsim: _____

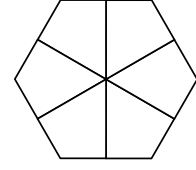
Belirtilen kesir kadarını boyyalım. Kesrin okunuşunu altına yazalım.



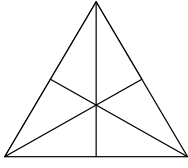
$$\frac{1}{2}$$



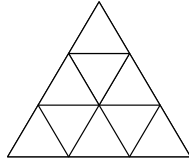
$$\frac{5}{6}$$



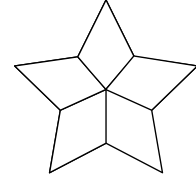
$$\frac{1}{3}$$



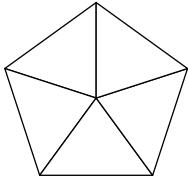
$$\frac{2}{3}$$



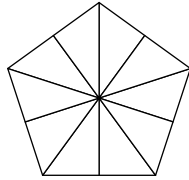
$$\frac{2}{9}$$



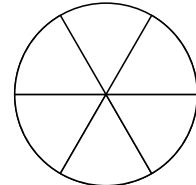
$$\frac{4}{5}$$



$$\frac{3}{5}$$



$$\frac{2}{5}$$



$$\frac{1}{6}$$
