


GEOMETRİK ŞEKİLLER



Aşağıdaki cümlelerde verilen noktalı alanları yukarıda verilen resme göre tamamlayınız.

.....tane kare vardır.


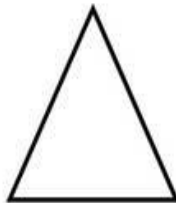


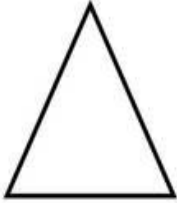
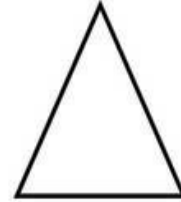
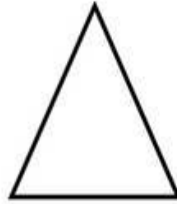


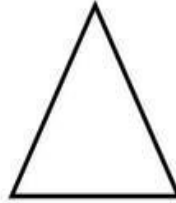


.....tane dikdörtgen vardır.

.....tane çember vardır.

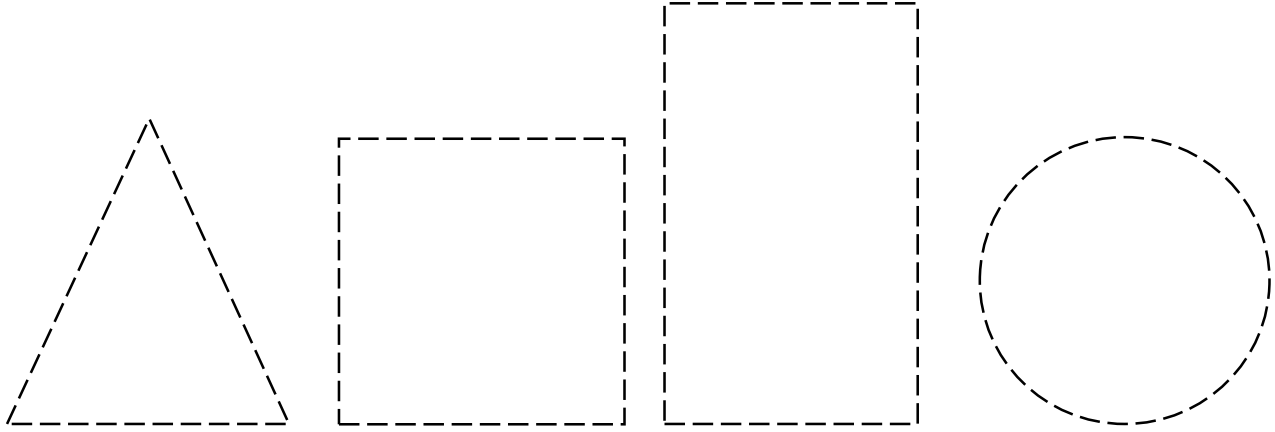
.....tane üçgen vardır.



Tabloda belirtilen renklere göre şekilleri boyayınız.



Aşağıdaki şekillerin köşelerini kırmızı, kenarlarını yeşil renge boyayınız. Köşe ve kenarı olmayan şeklin çevresini ise maviye boyayınız.



Aşağıdaki şekillerin;

3 köşesi ve 3 kenarı olanları **maviye** boyayınız.

4 köşesi ve 4 eşit uzunlukta kenar sayısı olanları **kırmızıya** boyayınız

4 köşesi, 2 uzun kenarı ve 2 kısa kenarı olanları **yeşile** boyayınız.

Köşesi ve kenarı olmayanları **sarıya** boyayınız.

