



## İKİŞER İLERİ RİTMİK SAYMA ÖĞRENIYORUM

Aşağıda verilen ritmik sayma örneğine bakarak boşlukları doldurunuz.


2	4	6	8	10	12	14	16	18	20
---	---	---	---	----	----	----	----	----	----




2      ○      6      ○      10      ○      14      ○      18      ○



○      4      ○      8      ○      12      ○      16      ○      20



2      4      ○      8      10      ○      14      16      ○      20



○      4      6      ○      10      12      ○      16      18      ○