





Nesneleri dikkatlice  
sayalım



# DESTE VE DÜZİNEYİ ÖĞRENİYORUM






Aşağıdaki nesneleri sayılarına göre uygun ifade ile eşleştiriniz



Deste




Düzine







Aşağıdaki kutulardaki toplardan eksik olanları tamamlayalım.




1 deste




1 düzine




1 düzine



1 düzine





1 deste



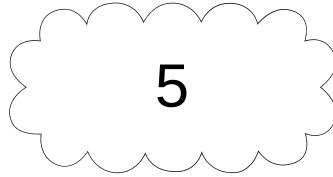
1 deste



Aşağıdaki cümlelerdeki boşlukları uygun kelimelerle tamamlayalım.



12



5



1 Deste



1 düzine



Aynı türden 10 nesne.....oluşturur.



1 Bukette 7 tane çiçek var. Bir düzine olabilmesi için.....tane çiçek eklemek gerekir.



Aynı türden 12 uğur böceği..... oluşturur



Bir düzine .....tanedir.