



Adım:.....

Soyadım:.....

Sonuç:

**Etkinlik 1**

Aşağıda verilen sayı örüntülerinin kurallarını bulup yazınız.

1, 3, 5, 7, 9 → **İkişer artan**

12, 10, 8, 6, 4 →

6, 7, 8, 9, 10 →

30, 25, 20, 15 →

20, 30, 40, 50 →

18, 17, 16, 15, 14 →

10, 15, 20, 25 →

70, 60, 50, 40 →

7, 9, 11, 13, 15 →

13, 14, 15, 16, 17 →

14, 12, 10, 8, 6 →

35, 30, 25, 20 →

15, 14, 13, 12, 11 →




@ufukkoca



@ufukkoca61

**Etkinlik 2**

Aşağıda verilen sayı örüntülerinde eksik bırakılan sayıları yazınız.





Adım:.....

Soyadım:.....

Sonuç: ☆☆☆☆

## Etkinlik 3

Şekil örüntülerin kurallarını yazınız.



Kural: 1 arı, 1 kuş



Kural: .....



Kural: .....



Kural: .....



Kural: .....



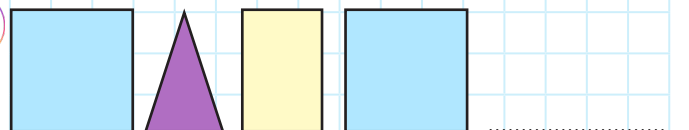
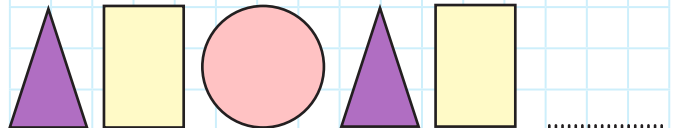
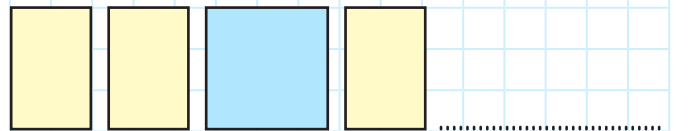
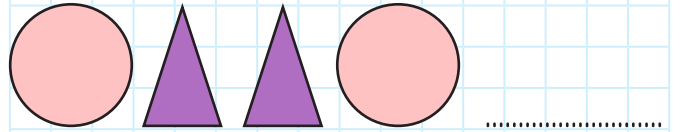
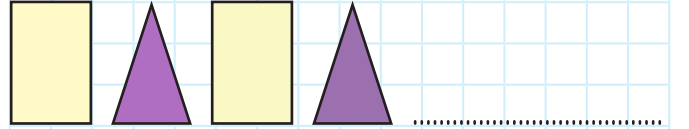
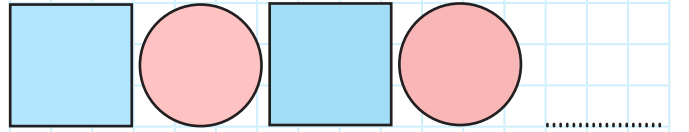
Kural: .....



Kural: .....

## Etkinlik 4

Şekil örüntülerin devamını çizip doğru renge boyayınız.



@ufukkoca



@ufukkoca61

