



BİLSEM



# SİMETRİ- YANSIMA-AYNALAR

Verilen cismin aynadaki görüntüsünü bulup işaretleyiniz.




Adım:.....



Soyadım:.....

Sonuç:




1.




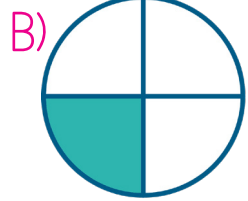


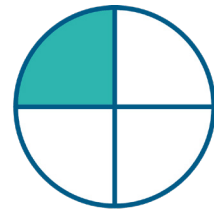
2.



3.



4.



@ufukkoca



@ufukkoca61





Adım:.....

Soyadım:.....


Sonuç:



5.

%65

50



A)

05

B)

20


C)

02

6.

%49

ET



A)

TE

B)

3T


C)

T3

7.

%45

FL



A)

LF

B)



JF

C)

FJ

8.

%40



A)



B)



C)



@ufukkoca



@ufukkoca61

